

Psychology
PAPER 1

Diagram Booklet

In the boxes below, write your name, centre number and candidate number.

Surname					
Other names					
Centre Number					
Candidate Number					

INSTRUCTIONS

There may be spare copies of some diagrams in case you need them.

THIS DIAGRAM BOOKLET MUST BE RETURNED WITH THE QUESTION PAPER AT THE END OF THE EXAMINATION.

Contents

Page

4	Question 5
5	Question 8
6	Question 9
7	Question 10
8	Question 14
9	Question 17
10	Question 17 (Spare copy)
11	Question 20

Question 5

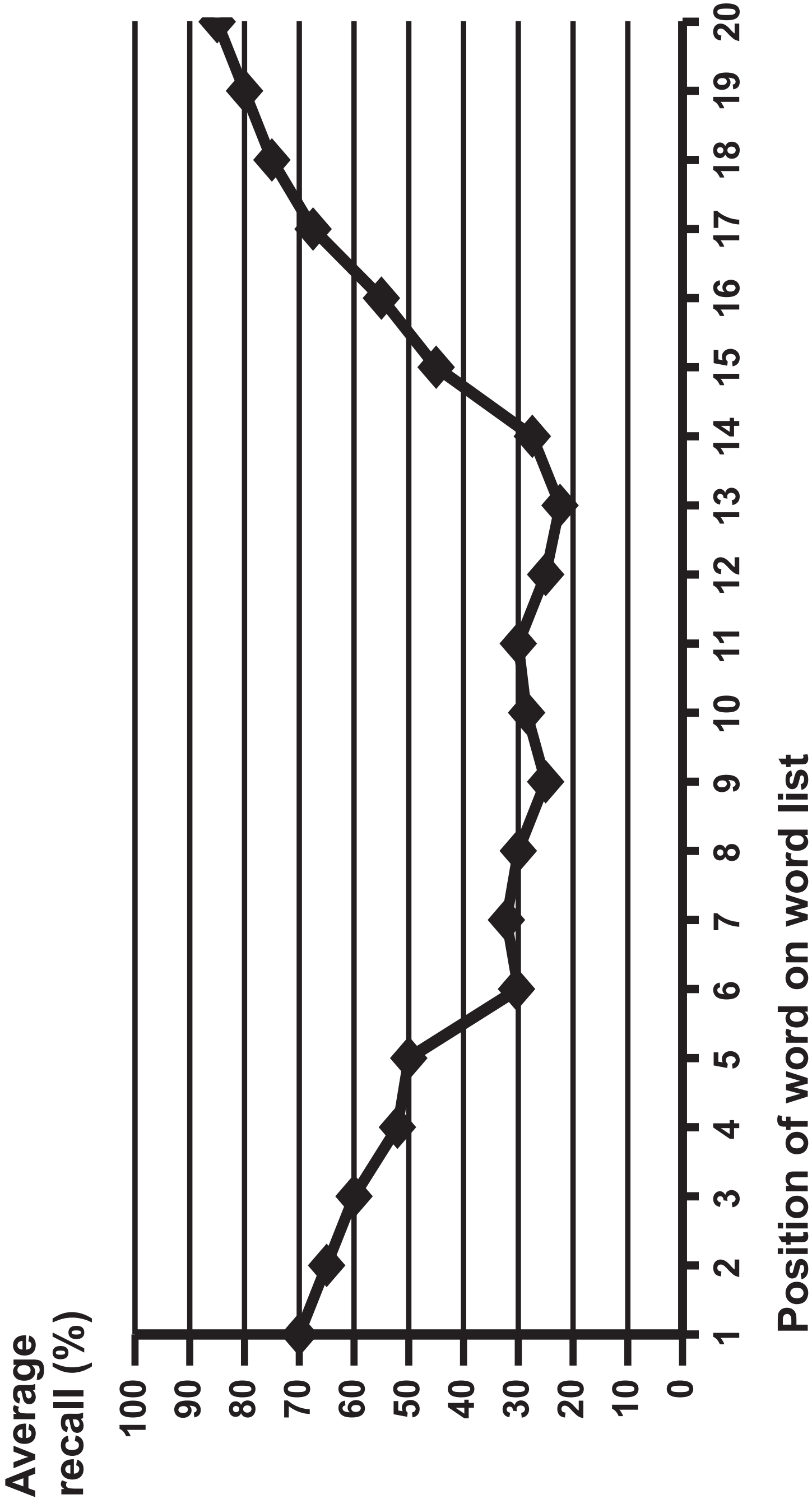
TABLE 1

Supervised by James		Supervised by the other teacher	
Pupil	Ability to share and take turns (1–10)	Pupil	Ability to share and take turns (1–10)
A	8	F	4
B	9	G	5
C	8	H	5
D	7	I	4
E	9	J	6

Question 8

FIGURE 2

A line graph to show the average recall (%) of each word in the word list



Question 9

FIGURE 3

Nishka's number lists										
Trial 1:	8	1	5	0						
Trial 2:	4	2	3	9	6					
Trial 3:	3	8	1	0	4	5				
Trial 4:	2	7	1	5	6	9	1			
Trial 5:	5	0	2	1	7	3	8	4		
Trial 6:	0	2	9	1	3	0	4	7	5	
Trial 7:	1	6	2	7	8	4	1	3	5	2

Question 10

TABLE 2

Condition	Percentage (%)
Participants who could read the paragraph	98%
Participants who could not read the paragraph	2%

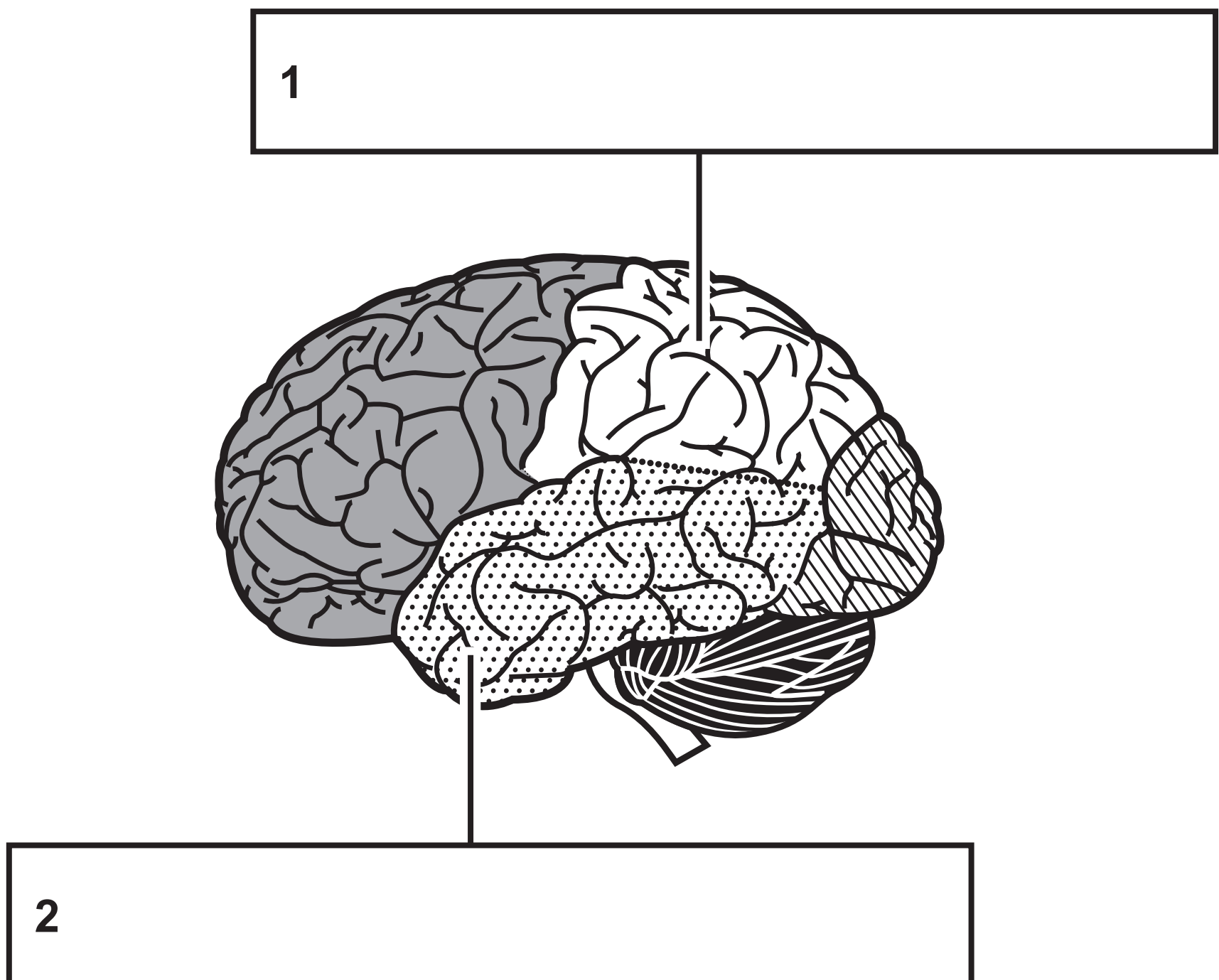
Question 14

TABLE 3

Group	Average rating of how convinced they were of CBT helping with their depression (1–10)	Average likelihood of attending CBT after reading the information article (1–10)
Group 1: patients given an information article that included a case study	8·7	7·0
Group 2: patients given an information article that included research evidence	6·5	7·1

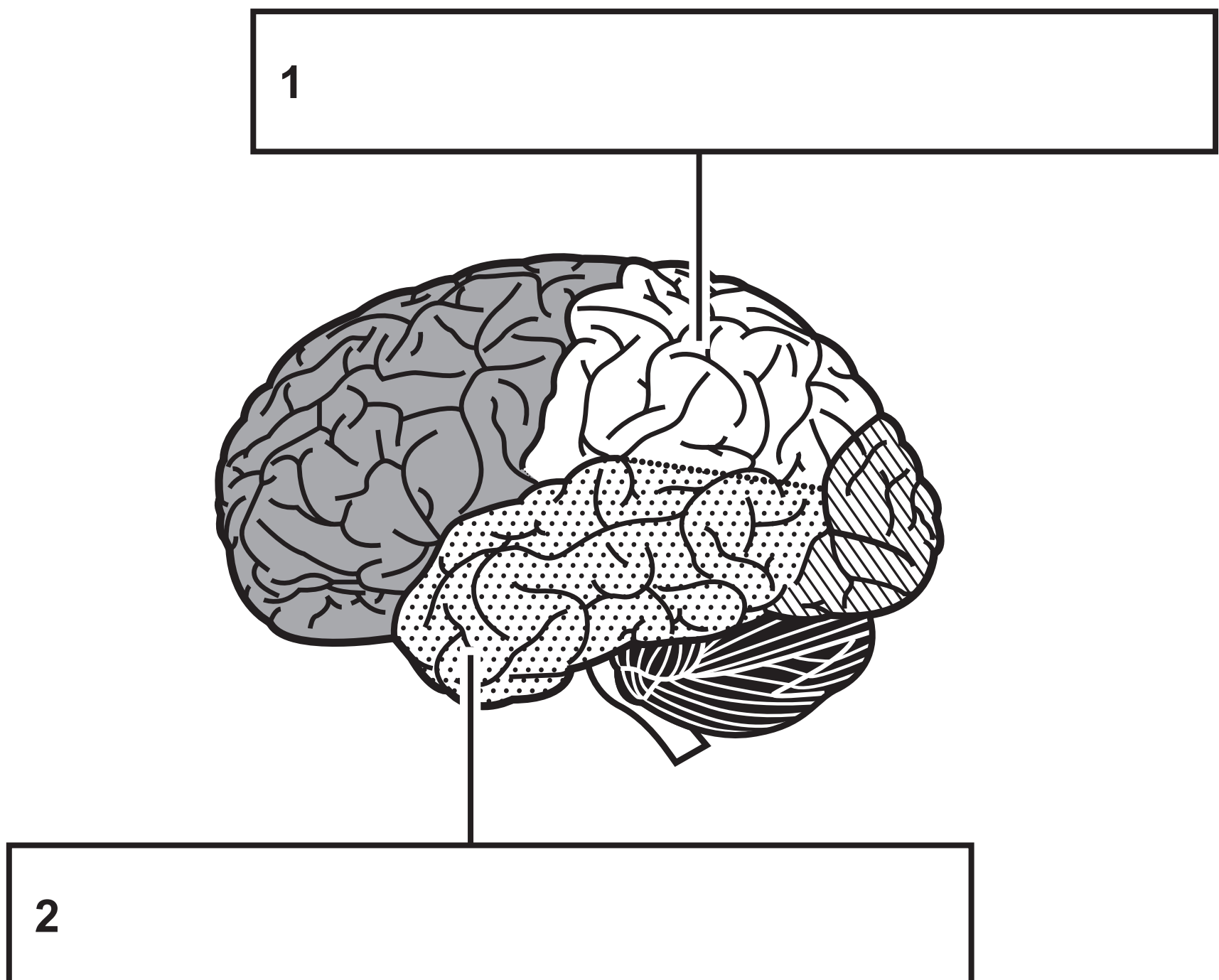
Question 17

FIGURE 4



Question 17

FIGURE 4



Question 20

FIGURE 5

A bar chart to show the percentage (%) of brain-damaged patients who were able to name the three images correctly

Percentage (%) of patients who named the image correctly

